




| | | |
|-------------------------|---------------------|------------------------|
| Time: 10 Minutes | Paper Math 2 | Total Marks: 10 |
|-------------------------|---------------------|------------------------|

| | |
|------------------------------|---|
| 3rd Month, 4th Week, 5th Day | Syllabus: Review Exercise. Q # 5 |
|------------------------------|---|

Q.1. Write the fractions for the coloured part of each shape. (10)

ہر شکل کے رنگ دار حصے کے مطابق فرکشن لکھیں۔


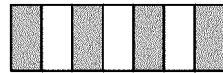



| | | |
|-------------------------|---------------------|------------------------|
| Time: 10 Minutes | Paper Math 2 | Total Marks: 10 |
|-------------------------|---------------------|------------------------|

| | |
|------------------------------|---|
| 3rd Month, 4th Week, 5th Day | Syllabus: Review Exercise. Q # 5 |
|------------------------------|---|

Q.1. Write the fractions for the coloured part of each shape. (10)

ہر شکل کے رنگ دار حصے کے مطابق فرکشن لکھیں۔






| | | |
|-------------------------|---------------------|------------------------|
| Time: 10 Minutes | Paper Math 2 | Total Marks: 10 |
|-------------------------|---------------------|------------------------|

| | |
|------------------------------|---|
| 3rd Month, 4th Week, 5th Day | Syllabus: Review Exercise. Q # 5 |
|------------------------------|---|

Q.1. Write the fractions for the coloured part of each shape. (10)

ہر شکل کے رنگ دار حصے کے مطابق فرکشن لکھیں۔



| | | |
|-------------------------|---------------------|------------------------|
| Time: 10 Minutes | Paper Math 2 | Total Marks: 10 |
|-------------------------|---------------------|------------------------|

| | |
|------------------------------|---|
| 3rd Month, 4th Week, 5th Day | Syllabus: Review Exercise. Q # 5 |
|------------------------------|---|

Q.1. Write the fractions for the coloured part of each shape. (10)

ہر شکل کے رنگ دار حصے کے مطابق فرکشن لکھیں۔

